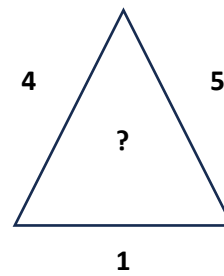
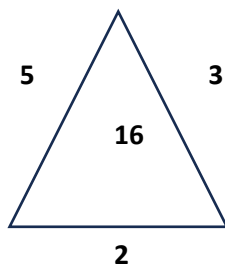
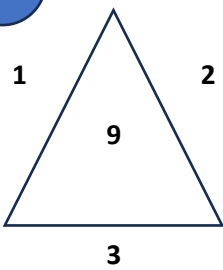
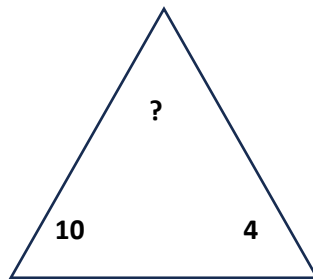
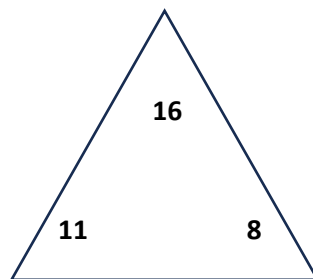
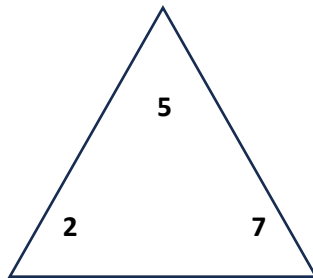
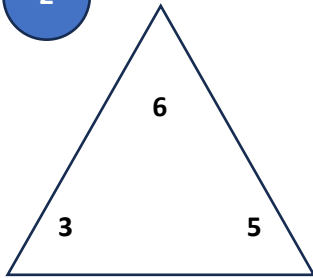


1



2

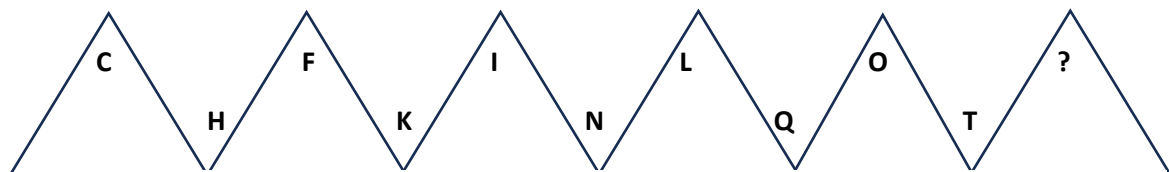


3

Complétez chacune des séries ci-dessous

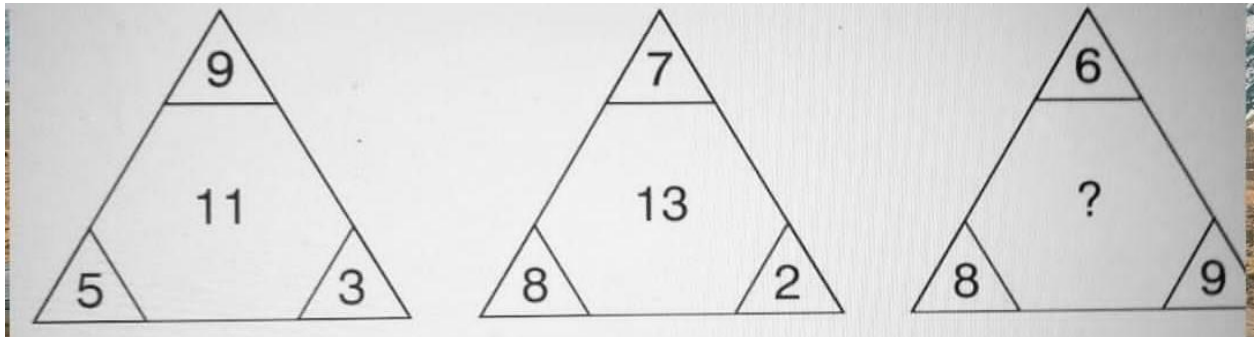
- I J 19 Q F 23 W L 35 H U ?
- PAPIER = 65 CISEAU = 58 PIERRE = ?
- AVION25 BATEAU13 CAMION136 VOITURE146 VELO ?
- JEBQ CIFR LDFV ? a. HFJU b. LDOR c. KMBZ
- B3E U5Z L3O ? a. F2A b. F2H c. Z4A

4

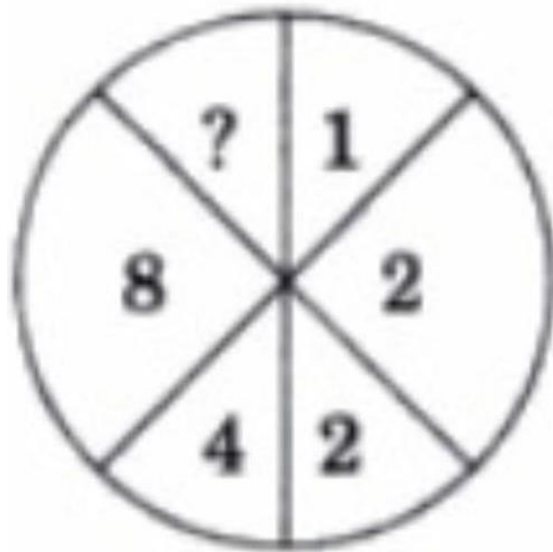


5

LA LOGIQUE NUMERIQUE



6



7

SOLEIL - 191212

MARS - 131819

LUNE - 1214

ETOILE - 2012

TERRE - ??????

8

100,1,98,17,95,14,91,10, ?, ?

9

Trouvez le mot manquant :

32114-CARRE-341364-CERCLE-36413- ?

10

FREDERIC habite RICHELIEU

MARCEL vit à CELIER

CAMIL à MILAN

où vit NATACHA ?

1) HAMBOURG 2) CHARTRES 3) CHERBOURG 4) HALLES